

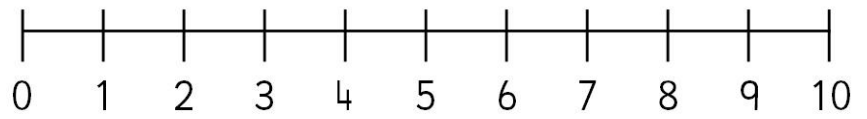


Number Line Addition

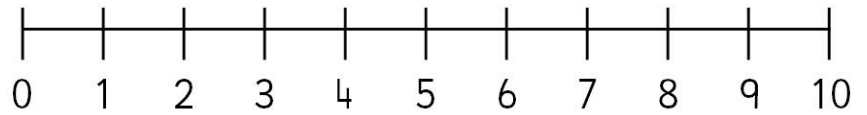


Finish the number sentences. Use the number lines to help.

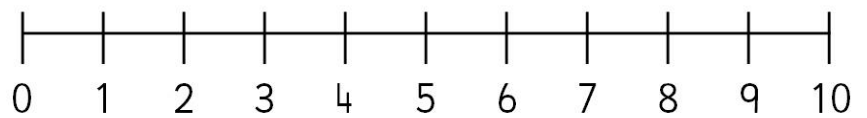
$4 + 3 = \square$



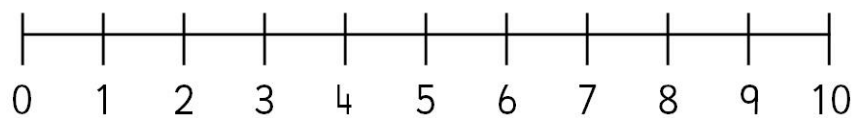
$3 + 5 = \square$



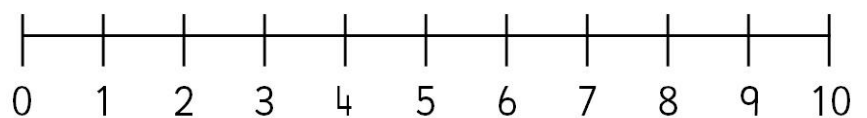
$0 + 4 = \square$



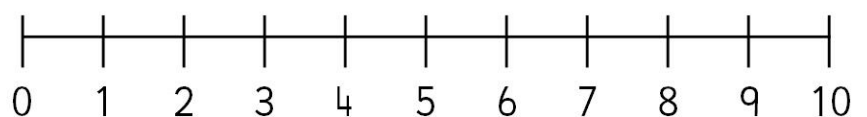
$7 + 1 = \square$



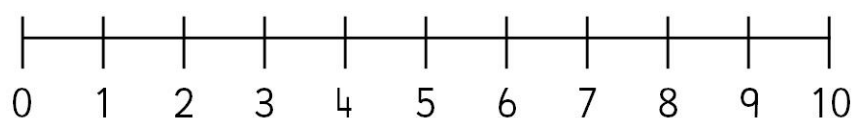
$3 + 1 = \square$



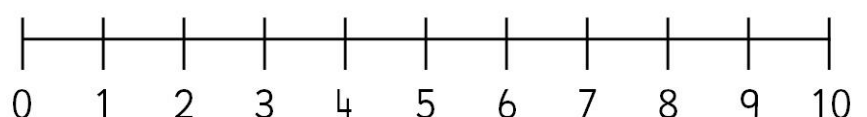
$6 + 2 = \square$



$9 + 1 = \square$



$5 + 5 = \square$



$8 + 0 = \square$

